

**AFSS CENTRAL EVALUATION SYSTEM**

Central Assessment Team (CAT), HO Islamabad

**Final Term/ Annual Examination 2015 – 2016**

**SCIENCE - Class I**

**100 marks 3 hours**

**INFORMATION FOR STUDENTS**

Marks are given against each question or part of question.

Write your name, roll number and date in the spaces provided below.

Student Name:  Roll No:

Center Name:  Date:

Day:

Invigilator Name:  Sign:

Marks Obtained:  Remarks:

Examiner Name:  Sign :

Date:  Day:

## **OBJECTIVE**

**Q. No. 1: Fill in the blanks by choosing the words given below. 10**

**(fish, frog, elephant, crocodile birds, ear, taste, skin, smell, eyes)**

- i) I am one of the biggest animals in the forest who am I? \_\_\_\_\_
- ii) I have biggest fins. Who am I? \_\_\_\_\_
- iii) I have scales all over my body. Who am I? \_\_\_\_\_
- iv) I live both on land and in water. Who am I? \_\_\_\_\_
- v) I have wings and feathers. Who am I? \_\_\_\_\_
- vi) We hear with our \_\_\_\_\_
- vii) We \_\_\_\_\_ with our tongue.
- viii) We touch and feel with the help of our \_\_\_\_\_.
- ix) We \_\_\_\_\_ with our nose.
- x) We see with our \_\_\_\_\_

**Q. No. 2: Put (✓) for the correct answer ad (✗) for the wrong statement. 5**

- i) Most plants grow flowers.
- ii) All seeds are of similar shape.
- iii) A baby plant gets food from the seed,
- iv) Fruits store seeds for the new plant.
- v) Leaves make food for the plant.

**Q. No. 3: Choose the correct answer? 10**


- i) Sun shines during the \_\_\_\_\_
  - a) day
  - (b) night
  - (c) mid-night

- ii) The sky is \_\_\_\_\_ during the day.  
a) black (b) blue (c) red
- iii) At night we can see many \_\_\_\_\_ in the sky.  
a) sun (b) stars (c) planets
- iv) \_\_\_\_\_ is big ball of fire.  
a) Earth (b) Sun (c) Moon
- v) When the Moon looks thin and c-shaped, it is called \_\_\_\_\_ Moon.  
a) half moon (b) crescent (c) full-moon
- vi) Some flowers change into \_\_\_\_\_  
a) seeds (b) fruits (c) plant
- vii) Fruit bear \_\_\_\_\_  
a) seeds (b) baby plants (c) flowers
- viii) Plants grow from \_\_\_\_\_  
a) seeds (b) flowers (c) baby plant
- ix) Seeds have \_\_\_\_\_ inside them.  
a) water (b) baby plants (c) leaves
- x) Leaves are usually \_\_\_\_\_ in colour.  
a) green (b) brown(c) black


**Q. No. 4: Choose from the words given below and label the parts of a plant.**

**5**


**(Bud, Leaf, Flower, Stem, Root)**



**Q. No. 5A: Name the animals that give us the following useful things. 5**



**B. Look at the living things in the pictures and encircle the plants and cross out the animals.** **5**



## **SUBJECTIVE**

**Q. No. 6: Give answers of the following questions.**

**2 x 10 = 20**

i) Name two animals that eat plants only:

1. \_\_\_\_\_ 2. \_\_\_\_\_

ii) Name two animals that eat meat only:

1. \_\_\_\_\_ 2. \_\_\_\_\_

iii) Name two animals that eat grain:

1. \_\_\_\_\_ 2. \_\_\_\_\_

iv) Name two animals that eat plant and animals both:

1. \_\_\_\_\_ 2. \_\_\_\_\_

v) Two birds that live in nests:

1. \_\_\_\_\_ 2. \_\_\_\_\_

vi) Name the four things that you can see around:

1. \_\_\_\_\_ 2. \_\_\_\_\_

vii) An airplane is flying in the sky. Is airplane a living or a non-living thing?

1. \_\_\_\_\_ 2. \_\_\_\_\_

viii) Two animals that live in a den

1. \_\_\_\_\_ 2. \_\_\_\_\_

ix) Two animals that live in a hole:

1. \_\_\_\_\_ 2. \_\_\_\_\_

x) Two animals that live in sheds

1. \_\_\_\_\_ 2. \_\_\_\_\_

**B) Answer the following questions.**

i) Name the seasons in your country.

---



---

ii) There is a large planet. Most of its parts are covered with water. What is the name of that planet?










---



---


**Q. No. 6(a): Match the animals to their food.**

**5**










	
	
	
	
	

**Q. No. 6(b): Identify the material as solid or liquid.**

**5**



**Q. No. 7: Some animal names got jumbled up rewrite them correctly. 10**

 <b>ankgoaro</b> _____	 <b>phelante</b> _____	 <b>sroeh</b> _____
 <b>bzera</b> _____	 <b>owlf</b> _____	 <b>itbbar</b> _____
 <b>ertig</b> _____	 <b>orgatiall</b> _____	 <b>mecal</b> _____



**Q. No. 8: What's the weather like? Write about each of them. 10**




---



---



---



---



---



---




---



---



---

**(b) Write down the name of the phase of the Moon.**




---



---



---




---



---



---